

2-D Shapes

- Name the 2-D shapes using the word bank below and write the numbers.

Word Bank

Pentagon

Rectangle

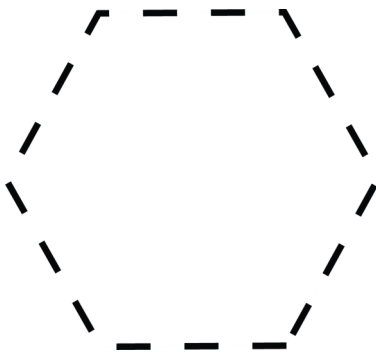
Hexagon

Triangle



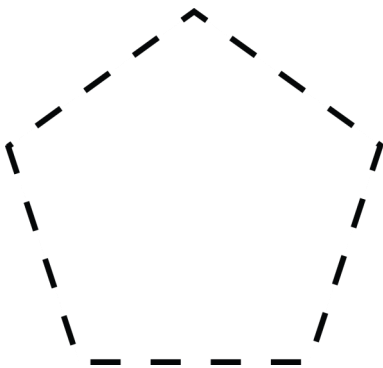
It is a _____ .

It has _____ sides and _____
Corners.



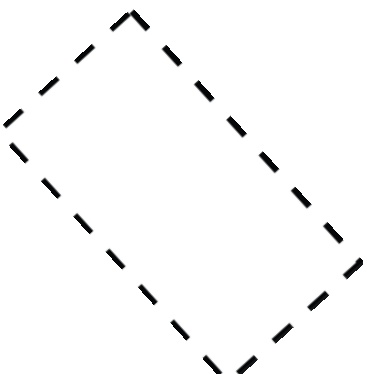
It is a _____ .

It has _____ sides and _____
Corners.



It is a _____ .

It has _____ sides and _____
Corners.



It is a _____ .

It has _____ sides and _____
Corners.