

3-D Shapes Test

Write the 3-D shapes name using word bank below.
Count the corners and edges.
Colour the shapes.

Word Banks

cone


prism

cube

pyramid

sphere

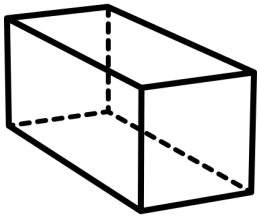
cylinder



Name of the shape _____

How many corners _____

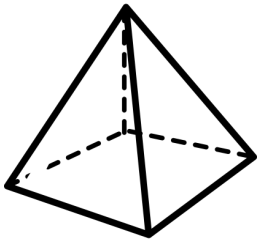
How many edges _____



Name of the shape _____

How many corners _____

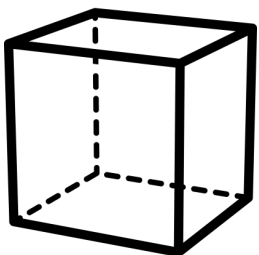
How many edges _____



Name of the shape _____

How many corners _____

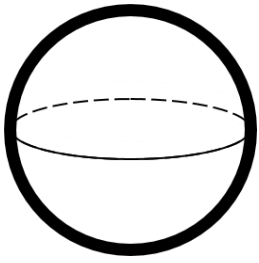
How many edges _____



Name of the shape _____

How many corners _____

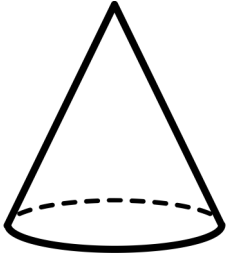
How many edges _____



Name of the shape _____

How many corners _____

How many edges _____



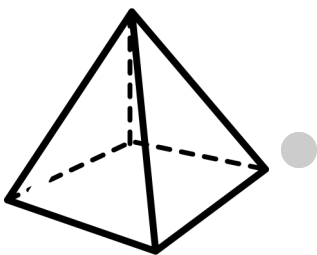
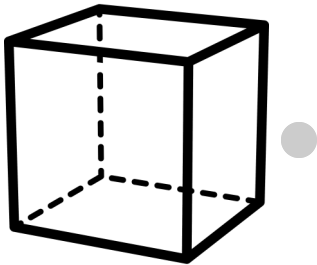
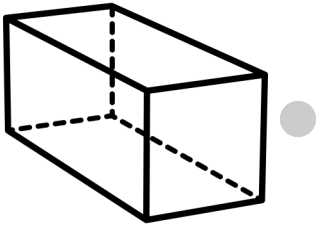
Name of the shape _____

How many corners _____


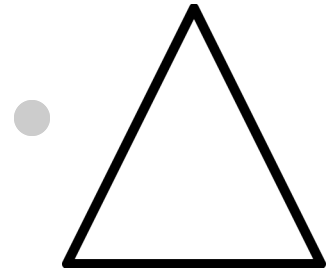
How many edges _____

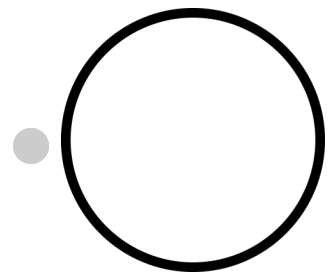
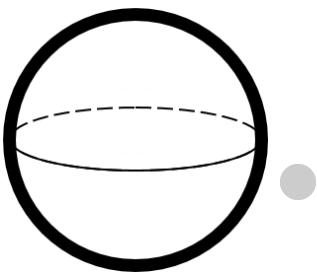
Draw a line to connect 3-D Shape to match 2-D shapes.

3-D Shapes



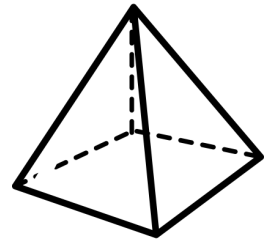

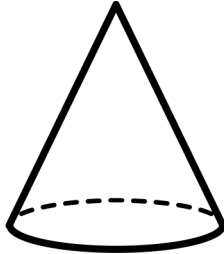
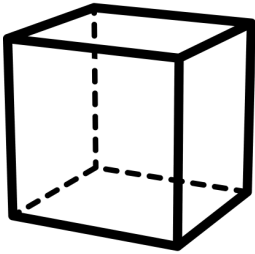
2-D Shapes



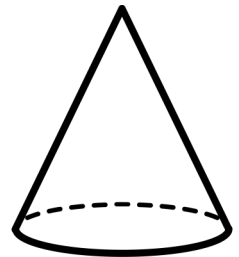
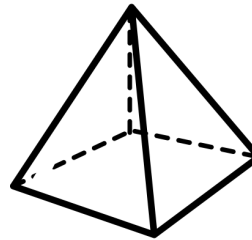

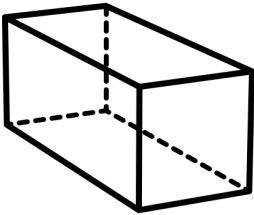


- Circle 3-D shapes that has more faces, edges and coners.

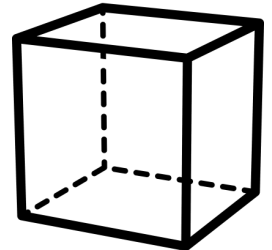
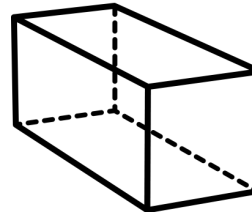

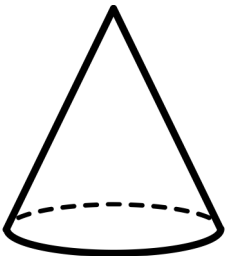
Circle the shape with more faces



Circle the shape with more edges



Circle the shape with fewer coners



Circle the shape with fewer edges

