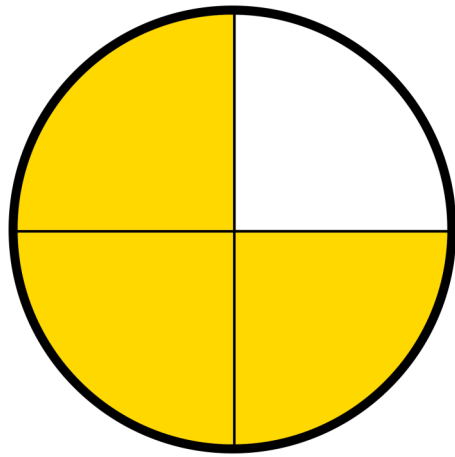
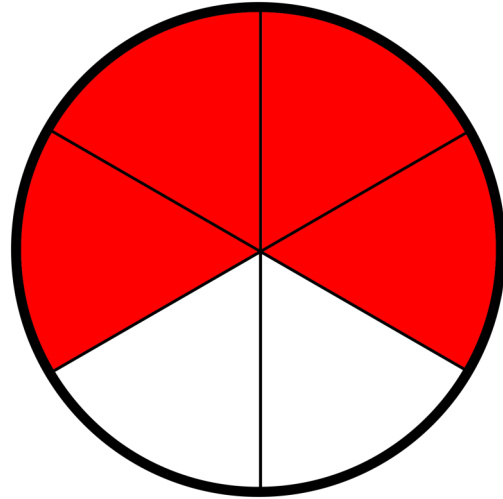


# Identify Fractions Shapes # 2

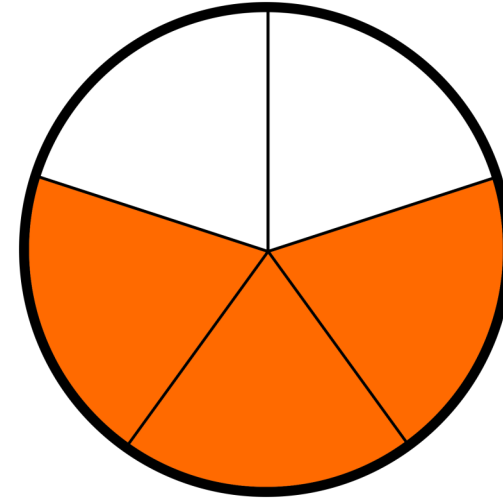
What fraction of the shapes is shaded, and circle the correct answer.




$\frac{1}{4}$        $\frac{4}{3}$        $\frac{3}{4}$




$\frac{4}{6}$        $\frac{2}{4}$        $\frac{6}{4}$




$\frac{2}{3}$        $\frac{5}{3}$        $\frac{3}{5}$



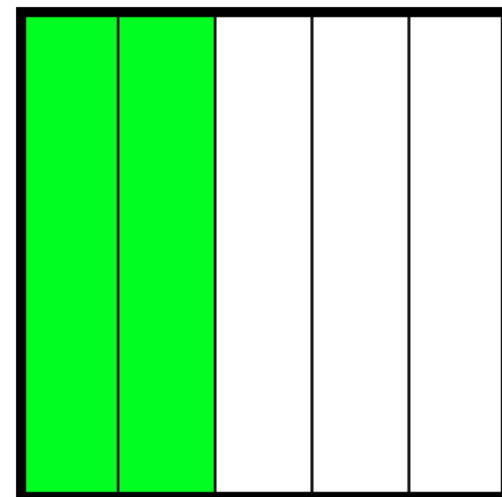
$\frac{4}{3}$        $\frac{1}{4}$        $\frac{3}{4}$



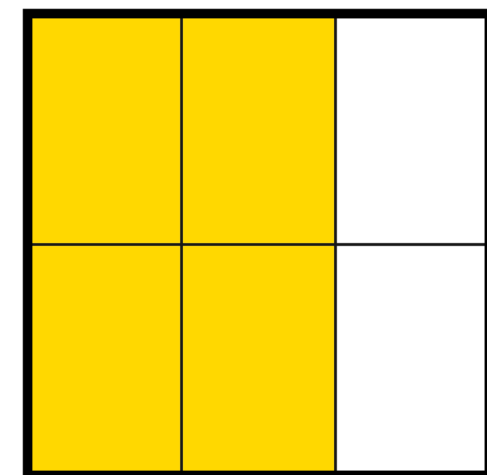
$\frac{3}{1}$        $\frac{1}{3}$        $\frac{1}{2}$



$\frac{2}{4}$        $\frac{1}{4}$        $\frac{4}{2}$



$\frac{3}{5}$        $\frac{2}{5}$        $\frac{5}{2}$



$\frac{4}{6}$        $\frac{2}{4}$        $\frac{6}{4}$