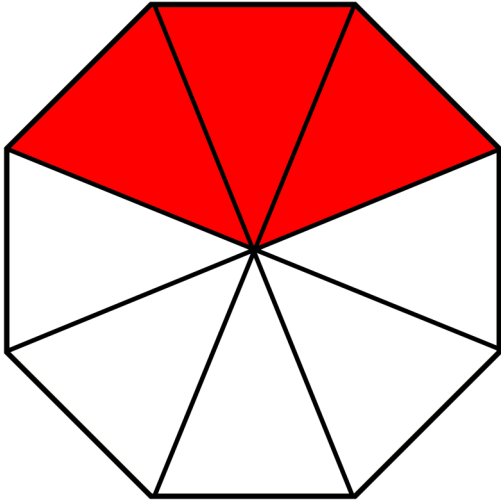



Identifying Fraction 2

- Circle the correct fractions.



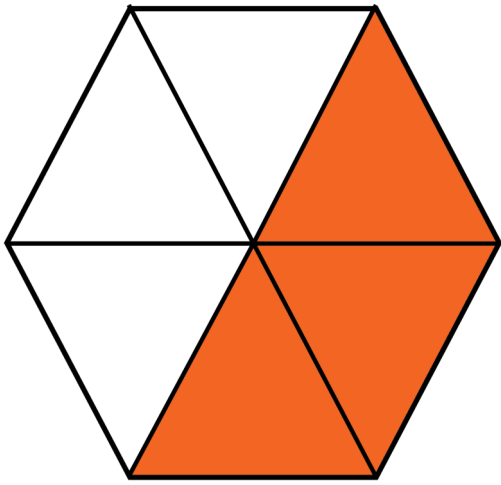
1	7	3
<hr/>	<hr/>	<hr/>
8	8	8




1	2	1
<hr/>	<hr/>	<hr/>
8	3	4



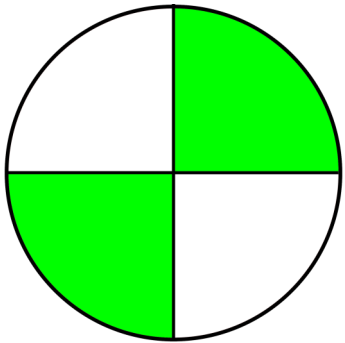
3	1	2
<hr/>	<hr/>	<hr/>
4	4	4



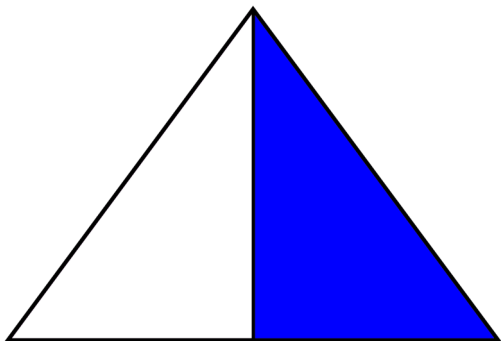
$$\begin{array}{r} 1 \quad 1 \quad 3 \\ \hline 3 \quad 2 \quad 6 \end{array}$$



$$\begin{array}{r} 1 \quad 1 \quad 2 \\ \hline 3 \quad 2 \quad 4 \end{array}$$



$$\begin{array}{r} 3 \quad 1 \quad 2 \\ \hline 4 \quad 4 \quad 4 \end{array}$$



$$\begin{array}{r} 1 \quad 1 \quad 2 \\ \hline 3 \quad 2 \quad 4 \end{array}$$