



Fractions


One Fourth

Grade 2



One Fourth Fraction


- Directions: Complete the fraction Statements.



_____ Part is green.

_____ Part are the same size. _____


_____ Of the inside is green.



_____ Part is yellow.

_____ Part are the same size. _____

_____ Of the inside is yellow.




_____ Part is orange.

_____ Part are the same size. _____

_____ Of the inside is orange.

One Fourth Fraction

- Directions: draw 3 lines inside the shape and colour one fourth



Part is _____

Part are the same size. _____


Of the inside is _____



Part is _____

Part are the same size. _____

Of the inside is _____




Part is _____

Part are the same size. _____

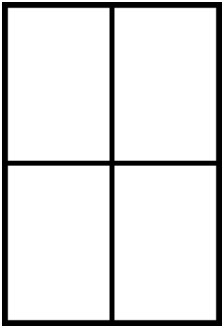
Of the inside is _____

One Fourth Fraction

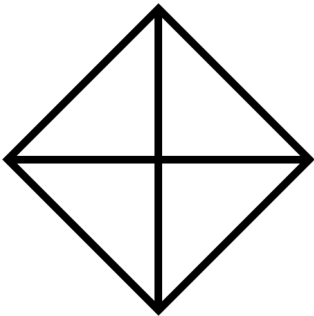
- Directions: Write and colour one fourth.



_____ of the inside is _____



_____ of the inside is _____



_____ of the inside is _____