




Fractions


One Third

Grade 2



One Third Fraction

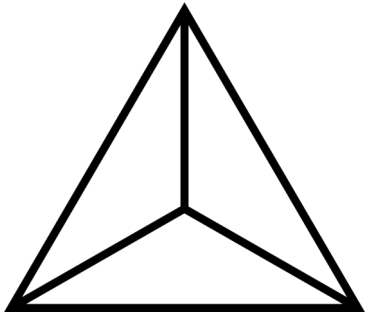
• Directions: Complete the fraction Statements.



_____ Part is blue.

_____ Part are the same size. _____

_____ Of the inside is blue.



_____ Part is green.

_____ Part are the same size. _____

_____ Of the inside is green.




_____ Part is red.

_____ Part are the same size. _____

_____ Of the inside is red.

One Third Fraction

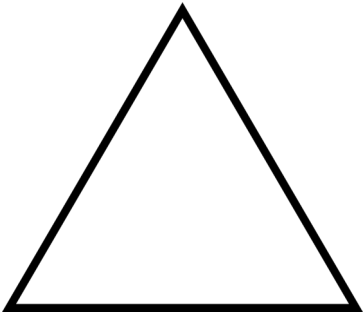
- Directions: draw 3 lines inside the shape and colour one third.



Part is _____

Part are the same size. _____


Of the inside is _____



Part is _____

Part are the same size. _____

Of the inside is _____




Part is _____

Part are the same size. _____


Of the inside is _____

One Third Fraction


- Directions: Write and colour one third.



_____ of the inside is _____



_____ of the inside is _____



_____ of the inside is _____