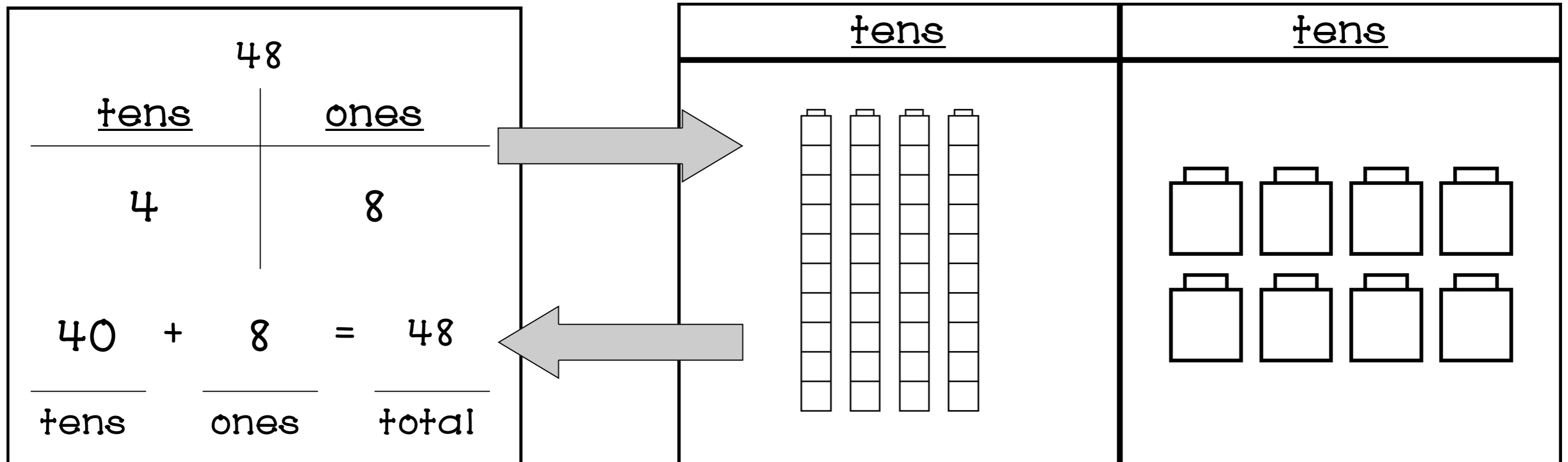


Tens and Ones

Grade 1 & 2



Tens and Ones

Students can practice learning tens and ones.

Page 4 tens and one's mat glue them on filing folder.

Page 3 cover page glue them on filing folder and colour the cover page.

Page 5 Cut the tens and ones, put them in the safe envelope, And glue the envelope to the filing folder.

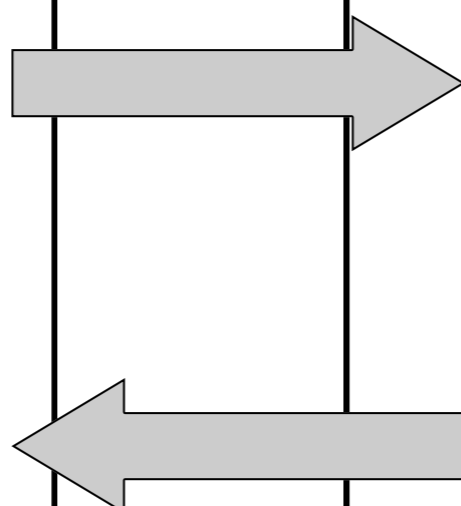
Page 6, 7, 8, 9 and 10 Worksheets.

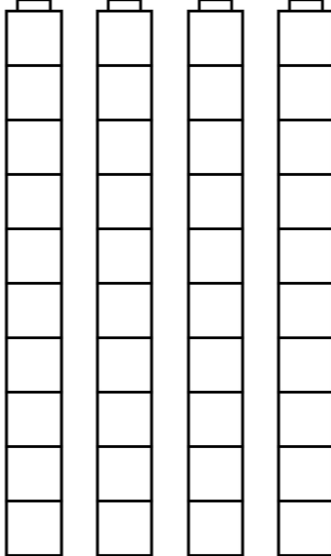
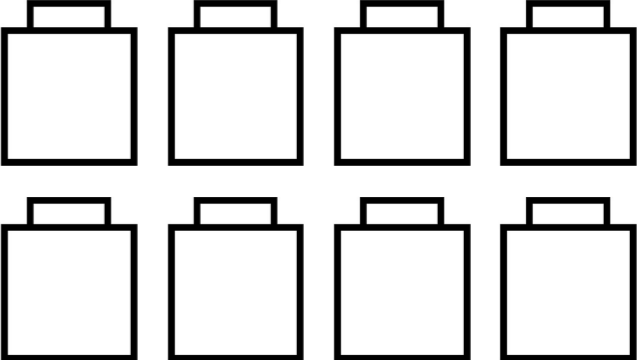
tens and ones
worksheets

Exam-
ple is

tens and Ones
mat

48	
<u>tens</u>	<u>ones</u>
4	8
40	+ 8 = 48
<u>tens</u>	<u>ones</u> <u>total</u>




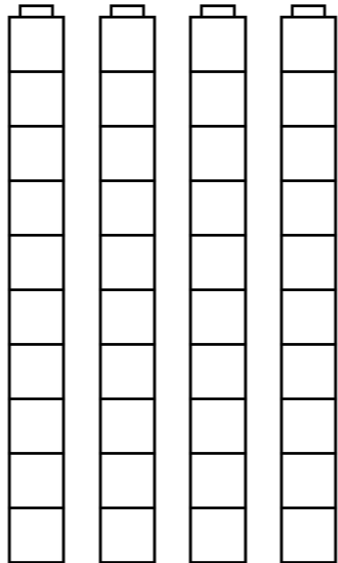
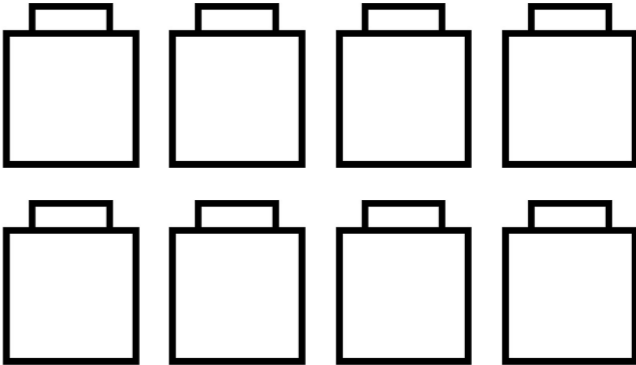
<u>tens</u>	<u>tens</u>
	

Tens and Ones

Practice Mat

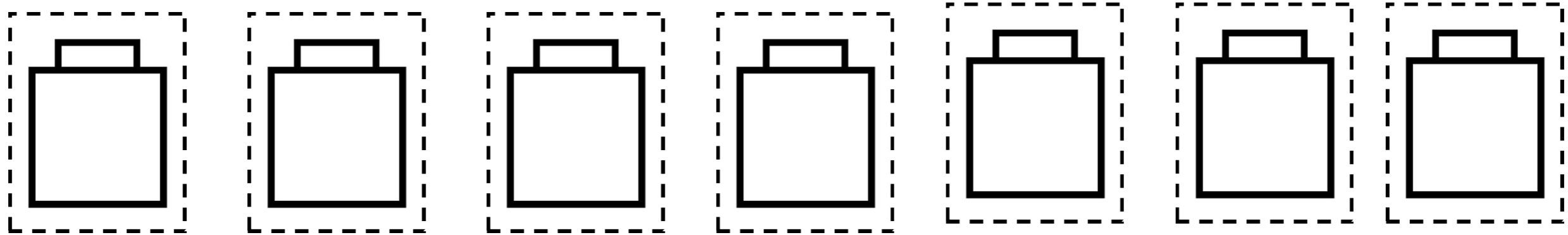
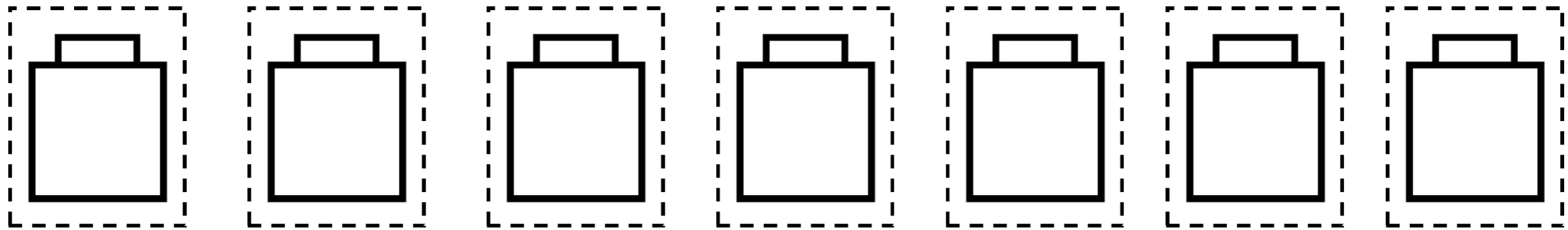
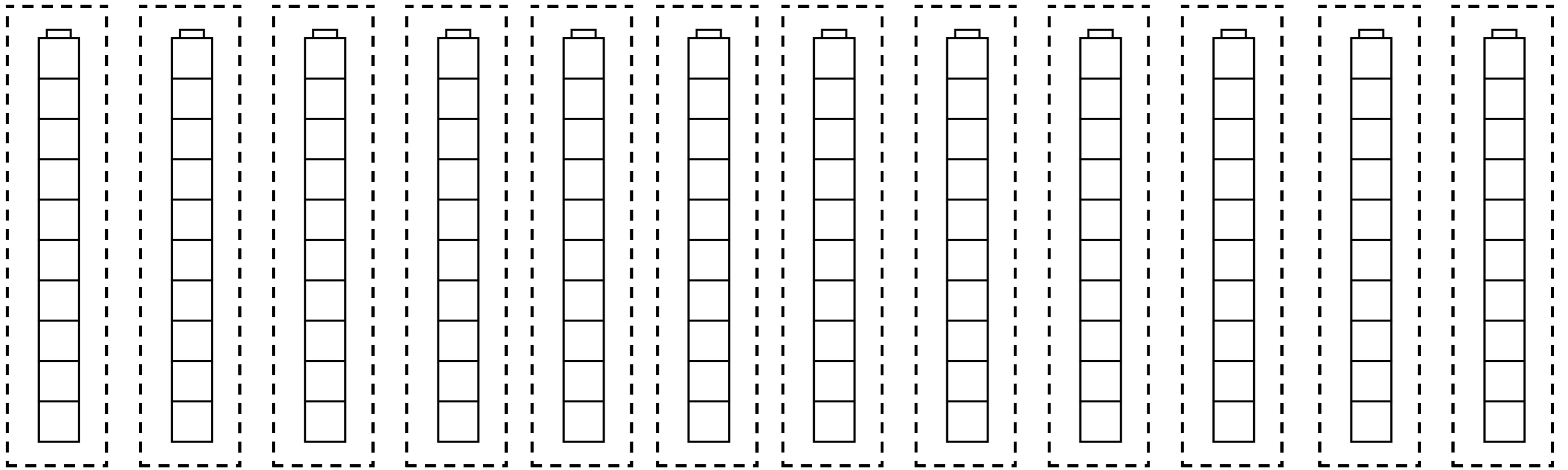
Name: _____



<u>tens</u>	<u>tens</u>
	

tens

ones



Cut out the blocks and put them in the envelope,
And keep them safe.

Tens and Ones

Write tens and ones and answer the question below.

48		
<u>tens</u>	<u>ones</u>	
4	8	
40 + 8 = 48		
_____	_____	_____
tens	ones	total

12		
<u>tens</u>	<u>ones</u>	
+ =		
_____	_____	_____
tens	ones	total

66		
<u>tens</u>	<u>ones</u>	
+ =		
_____	_____	_____
tens	ones	total

55		
<u>tens</u>	<u>ones</u>	
+ =		
_____	_____	_____
tens	ones	total

38		
<u>tens</u>	<u>ones</u>	
+ =		
_____	_____	_____
tens	ones	total

99		
<u>tens</u>	<u>ones</u>	
+ =		
_____	_____	_____
tens	ones	total

Write tens and ones and answer the question below.

41		
<u>tens</u>	<u>ones</u>	
+ =		
tens	ones	total

19		
<u>tens</u>	<u>ones</u>	
+ =		
tens	ones	total

73		
<u>tens</u>	<u>ones</u>	
+ =		
tens	ones	total

77		
<u>tens</u>	<u>ones</u>	
+ =		
tens	ones	total

56		
<u>tens</u>	<u>ones</u>	
+ =		
tens	ones	total

29		
<u>tens</u>	<u>ones</u>	
+ =		
tens	ones	total

Write tens and ones and answer the question below.

24		
<u>tens</u>	<u>ones</u>	
+ =		
tens	ones	total

33		
<u>tens</u>	<u>ones</u>	
+ =		
tens	ones	total

42		
<u>tens</u>	<u>ones</u>	
+ =		
tens	ones	total

88		
<u>tens</u>	<u>ones</u>	
+ =		
tens	ones	total

95		
<u>tens</u>	<u>ones</u>	
+ =		
tens	ones	total

86		
<u>tens</u>	<u>ones</u>	
+ =		
tens	ones	total

Write tens and ones and answer the question below.

95		
<u>tens</u>	<u>ones</u>	
+	=	
tens	ones	total

69		
<u>tens</u>	<u>ones</u>	
+	=	
tens	ones	total

28		
<u>tens</u>	<u>ones</u>	
+	=	
tens	ones	total

13		
<u>tens</u>	<u>ones</u>	
+	=	
tens	ones	total

46		
<u>tens</u>	<u>ones</u>	
+	=	
tens	ones	total

51		
<u>tens</u>	<u>ones</u>	
+	=	
tens	ones	total

Write tens and ones and answer the question below.

22		
<u>tens</u>	<u>ones</u>	
+	=	
tens	ones	total

75		
<u>tens</u>	<u>ones</u>	
+	=	
tens	ones	total

92		
<u>tens</u>	<u>ones</u>	
+	=	
tens	ones	total

83		
<u>tens</u>	<u>ones</u>	
+	=	
tens	ones	total

44		
<u>tens</u>	<u>ones</u>	
+	=	
tens	ones	total

17		
<u>tens</u>	<u>ones</u>	
+	=	
tens	ones	total